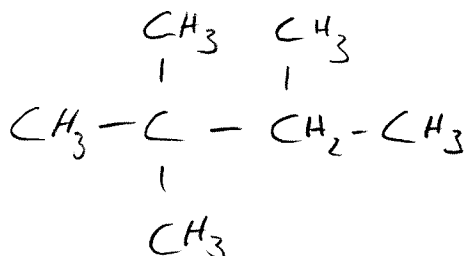


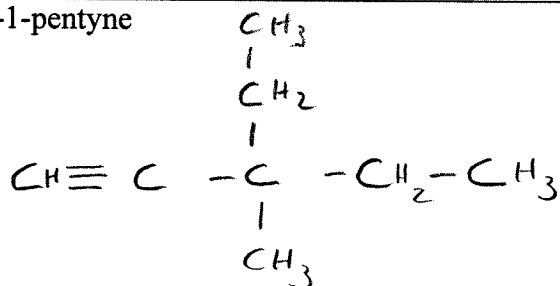
Mixed Naming Worksheet #2

Draw the structural formula for each of the following:

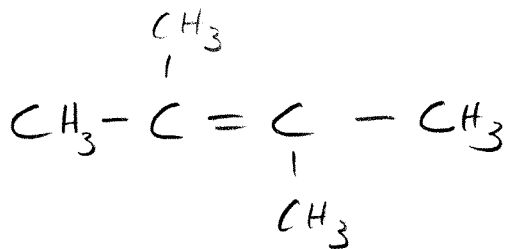
2,2,3-trimethylbutane



3-ethyl-3-methyl-1-pentyne



2,3-dimethyl-2-butene



4,4-diethyl-2,3,5,5-tetramethyl-2-hexene

