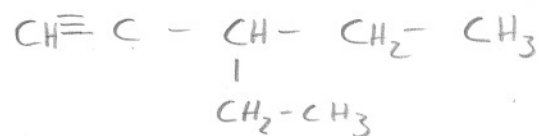


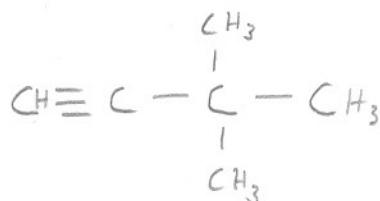
Naming Alkynes Worksheet #2

Draw the structural formula for each of the following:

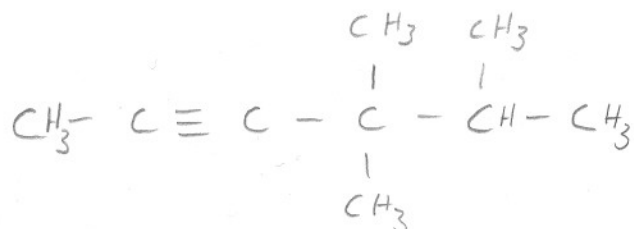
3-ethyl-1-pentyne



3,3-dimethyl-1-butyne



4,4,5-trimethyl-2-hexyne



4-ethyl-4-methyl-2-pentyne

